


Here are some drinks. Each drink has the size written beneath it. Write the measurements in order from the smallest to the largest.



smallest				largest

- Bottle A contains  $\frac{1}{4}$  litre (250ml);
- Bottle B contains  $\frac{1}{2}$  litre;
- Bottle C contains  $\frac{3}{4}$  litre (750ml);
- Bottle D contains 1 litre;
- Bottle E contains 2 litres.



Complete the following number sentences using  $>$  or  $<$ .

Bottle A  Bottle C

Bottle B  Bottle A

Bottle E  Bottle C

Bottle D  Bottle C

Bottle C  Bottle A

Bottle D  Bottle B

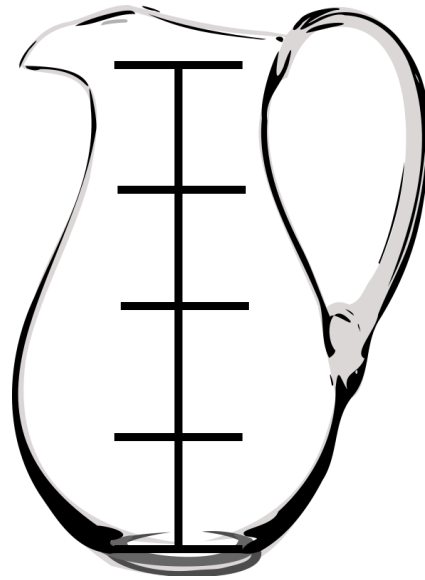
Use the  $>$ ,  $<$  and  $=$  symbols to complete the following:

$\frac{1}{2}$  a 1 litre bottle  750ml

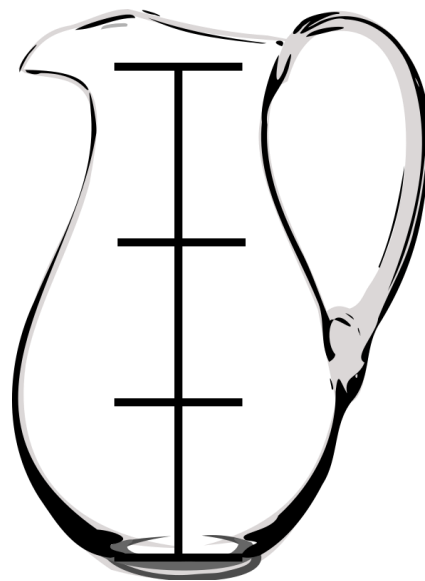
$\frac{1}{4}$  of a 2 litre bottle  500 ml

$\frac{1}{2}$  a 2 litre bottle  Full 1 litre bottle

*This jug can hold 4 litres.  
Show how much 2 litre is by  
shading in the jug up to 2  
litres.*



*This jug can hold 3 litres.  
Show how much 3 litre is by  
shading in the jug up to 3  
litres.*



*This jug can hold 5 litres.  
Show how much 2 litres are by  
shading in the jug up to 4  
litres.*

